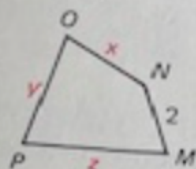
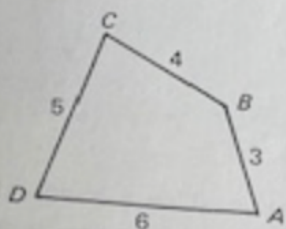


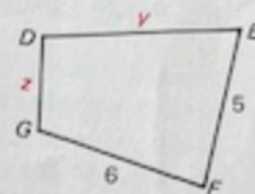
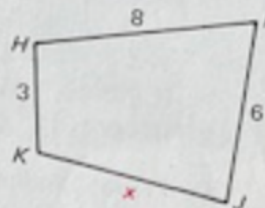
Find the lengths of the missing sides

19.



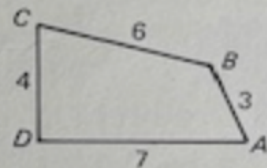
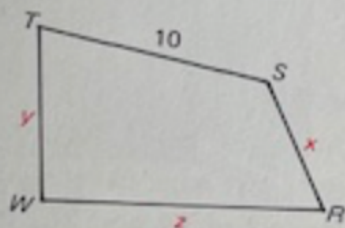
quad. $ABCD \sim$ quad. $MNOP$

21.



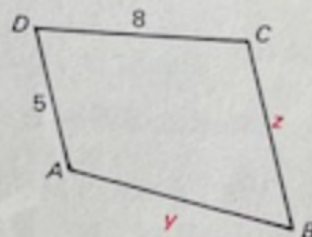
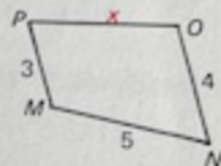
quad. $HIJK \sim$ quad. $DEFG$

20.



quad. $RSTW \sim$ quad. $ABCD$

22.



quad. $ABCD \sim$ quad. $MNOP$